

Name \_\_\_\_\_

Mark the best answer.

Find the missing part for exercises 1 and 2.

45%

Topic 2

Test

6x

1.



part I know



whole

(A) 4

(B) 3

(C) 2

(D) 1

2. There are 8 jars. 6 jars have jelly. The rest have peanut butter. How many jars have peanut butter?


(A) 3

(B) 14

(C) 2

(D) 5

8



3. Use cubes to solve. Choose the number sentence that shows the story.

Faiza has 3 purses. She gives 2 away as gifts. How many purses does Faiza have left?

$3 - 2 = 1$

$3 + 2 = 5$

$5 - 2 = 3$

$5 - 3 = 2$

(A)

(B)

(C)

(D)

4. Roberto ate 10 crackers. Carrie ate 5 crackers. How many more crackers did Roberto eat than Carrie?

$10 + 5 = 15$

$15 - 5 = 10$

$10 - 5 = 5$

$5 + 5 = 10$

(A)

(B)

(C)

(D)

(Topic 2 – Additions)

---

10. Write a number sentence that shows the missing number of marbles.

There are 8 marbles in all.




$$\underline{8} - \underline{4} = \underline{4}$$



11. Draw a picture to solve.  
There are 7 balloons in all. 2 are red.  
How many are not red?

$$\underline{7} - \underline{2} = \underline{5}$$



12. Which is a related subtraction sentence?




- A.  $2 + 4 = 6$
- B.  $5 + 2 = 7$
- C.  $4 + 3 = 7$
- D.  $3 + 5 = 8$



Name \_\_\_\_\_

5. Find the missing part.  
Write the numbers.

**9**




4                      5

part I know              missing part

Complete the picture.  
Write a subtraction sentence.

6. Jennifer has 6 guitar picks.  
She gives 4 guitar picks to  
her students. How many  
guitar picks are left?


**6**



6 - 4 = 2

7. Draw the missing counters.  
Write the numbers.


**8**



$8 - 4 = 4$   
 $4 + 8 = 6$

8. Circle the number  
sentence that is true.

**7**



~~$7 = 4 - 3$~~        ~~$4 = 7 - 3$~~   
 ~~$3 - 4 = 7$~~        $7 - 3 = 5$

9. Write a subtraction story for  $8 - \underline{\quad} = 2$ . Draw a picture.

\_\_\_\_\_  
\_\_\_\_\_  
\_\_\_\_\_

